

VTS EXAMINATION 2016-17 (FINAL)
QUESTION PAPER

Class : V

5

Score : 400

Time : 2 hrs

Register No :

General Instructions

1. Candidates are supplied with an OMR Answer Sheet.
2. Answer the questions in the OMR Sheet by shading the appropriate bubble.
3. Shade the bubbles with black ball point pen.
4. Each question carries four marks.
5. Use the space provided in the last page for rough work.

Read the Passage and answer the following questions.

There was a massive old peepal tree in our garden. Part of the tree was outside the garden shading the main road. The Public Works Department wanted to widen the road. The tree and a bit of our wall were in the way. They asked grandfather for permission to cut the tree.

The peepal tree had been there for hundreds of years. Pret, a mischievous ghost had been living in the branches. But neither the tree nor the ghost can overcome the wishes of the PWD. After grandfather's permission, the workers chopped all the branches until the poor tree was quite naked. It must have been at this moment that pret moved to our house.

1. Which was the massive tree in the narrators garden ?
A. Mango tree B. Peepal tree C. Apple tree D. Cherry tree
2. To whom did the PWD people ask permission to cut the tree ?
A. Father B. Grand mother C. Grand father D. Mother
3. What had been living on the branches of the tree ?
A. A bird B. A squirrel C. A snake D. A ghost
4. A word in the passage which means 'to cut' is
A. Overcome B. Chopped C. Bit D. Moment
5. Please listen what I say.
A. On B. At C. To D. For
6. It is something onlyelephant can do.
A. A B. An C. The D. Is
7. Anya for an hour when we arrived.
A. Has been sleeping B. Had been sleeping C. Is sleeping D. Slept
8. you please lend me a pen ?
A. May B. Can C. Could D. Shall

9. One word for 'out of the usual course'
 A. Ordinary B. Simple C. Extraordinary D. Challenging
10. Find out the correct sentence.
 A. It is between you and I B. It is between I and you
 C. It is between you and me D. It is between your and mine
11. Find out the correctly spelt word.
 A. Comitee B. Committee C. Committee D. Commity
12. is the young one of 'crow'.
 A. Fawn B. Pup C. Chick D. Spat
13. A of stars.
 A. Wad B. Galaxy C. String D. Hedge
14. We live in this house. This house is
 A. Our B. Us C. Mine D. Ours
15. from bad company.
 A. Keep abreast B. Keep company C. Keep down D. Keep away
16. The smallest number that should be added to 123 to make it a square number is
 A. 2 B. 7 C. 20 D. 21
17. $\frac{4}{7}$ of 7 is
 A. 3 B. 4 C. 7 D. 47
18. On dividing $\frac{16}{3}$ by $1\frac{1}{3}$, we get
 A. 3 B. 4 C. 5 D. 6
19. $\frac{3}{5}$ of one kg is
 A. 6000 B. 600 C. 100 D. 1000
20. The measure of each angle of an equilateral triangle is
 A. 30° B. 60° C. 60° D. 180°
21. A quadrilateral whose all sides are equal, is
 A. Rhombus B. Rectangle C. Triangle D. Trapezium
22. A simple closed figure, every point of which is equidistant from a fixed point, is called
 A. Triangle B. Circle C. Square D. Hexagon
23. The perimeter of a square is 44 cm. Its area is
 A. 22 B. 11 C. 111 D. 121
24. The freezing point of water is $^\circ\text{F}$
 A. 0° B. 24° C. 30° D. 32°

25. 1 million = thousands
 A. 10 B. 100 C. 1000 D. 10,000
26. Place value of the underlined digit in
 32 58 72 532
 A. 800 B. 8000 C. 80,000 D. 800,000
27. The numeral for three crore twenty five lakh thirty five thousand and one is
 A. 32 532 01 B. 325 35 001 C. 32 25 3501 D. 325 3501
28. Which of the following is not a perfect square ?
 A. 16 B. 25 C. 100 D. 444
29. 0.15 =
 A. $\frac{15}{10}$ B. $\frac{150}{100}$ C. $\frac{15}{100}$ D. $\frac{15}{1000}$
30. $\frac{(5+5+5)\div 5}{(6+6+6)\div 6} = \dots\dots\dots$
 A. 2 B. 6 C. 3 D. 1
31. The seed which spreads through bursting
 A. Mango B. Orange C. Castor D. Cumin seed
32. Among the following select the vehicle which is not ecofriendly.
 A. Bicycle B. Bullock-cart C. Horse-cart D. Bike
33. Always water flows downwards on any slope, because of
 A. Gravitational force B. Frictional force
 C. Both gravitational force and frictional force D. None
34. First Indian woman to space
 A. Madhumathi B. Kalpana Chawla C. Sunitha Williams D. Madhu Chawla
35. Write the name of a bird which has eyes in front of its head
 A. Parrot B. Owl C. Crow D. Pigeon
36. The animals that are awake at night can see things only in and colours
 A. Red and Blue B. Black & Red C. Black and White D. White and Red
37. About half the children in our country are not getting enough food. They are weak and often ill. The only solution for their problem is
 A. Eat fast food B. Eat more C. Eat proper food D. None
38. Tomato and potato came from
 A. South America B. Europe C. Africa D. Sri Lanka

39. The best method to clean drinking water
 A. Warming B. Cooling C. Filtering D. Boiling
40. is a neighbouring state of Kerala
 A. Maharashtra B. Rajasthan C. Karnataka D. Goa
41. A famous author of India namely Nayani Krishnakumari passed away recently. Which language was she used to write ?
 A. Telugu B. English C. Tamil D. Sanskrit
42. T.N. Gopakumar, who passed away recently, was associated with which field?
 A. Biotechnology B. Journalism C. Painting D. Information Technology
43. Which country hosted 2016 ICC under 19 Cricket World Cup
 A. Australia B. India C. South Africa D. Bangladesh
44. President rule imposed in a state has been cancelled by Supreme Court in July 2016. Name the state.
 A. Arunachal Pradesh B. Uttar Pradesh C. Madhya Pradesh D. Goa
45. Name the scheme launched by the Govt. of India for online booking of LPG cylinders
 A. Sahaj B. Sahodaya C. Annapoorna D. Andyodaya
46. The first lady Chief Minister in India.
 A. Sucheta Kriplani B. Mayavati C. Janaki D. Sheila Dikshit
47. The judge of High Court of India can remain in office till the age of
 A. 62 B. 60 C. 55 D. 52
48. Who was the only person honoured with “Padma Shri”, “Padma Bhooshan”, “Padma Vibhooshan” and “Bharat Ratna” ?
 A. C.V. Raman B. Mother Teresa C. Dr. B.R. Ambedkar D. Zakir Hussain
49. Letter H in WHO stands for
 A. Health B. Hockey C. Human D. Headquarters
50. What is the full form of ISRO ?
 A. Indian Satellite Regional Officer B. Indian Space Research Organization
 C. Information system of Research Organization D. Indian Spices Research Organization
51. Who is the inventor of motor car ?
 A. David Bushnell B. Christopher Sholes C. Karl Benz D. Edward Jenner
52. The Father of Surgery is
 A. S.C. Roy B. A.O. Hume C. Athreya D. Sushruta
53. Who is the inventor of Penicillin ?
 A. Louis Braille B. Issac Newton C. John Napier D. Alexander Fleming

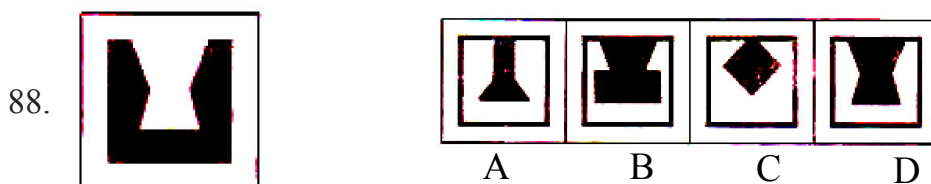
54. Who is known as 'American Gandhi' ?
 A. Martin Luther King B. George Bush
 C. George Washington D. Abraham Lincoln
55. The last Governor General of Independent India
 A. Rajagopalachari B. Lord Mountbatten C. Lord Irwin D. Lord Hardinge
56. Who published the news paper 'Indian Opinion' ?
 A. Sardar Vallabhbhai Patel B. Bal Gangadhar Tilak C. Gandhiji D. Nehru
57. Nehru got placed in Indian postal stamp in
 A. 1964 B. 1954 C. 1988 D. 1975
58. The name Gurudev was given to Tagore by
 A. Nehru B. Gandhiji C. Azad D. Lal Bahadur Shastri
59. is the capital of Malaysia
 A. Jakharta B. Kuala Lumpur C. Paris D. Washington
60. The capital of Australia is
 A. Sydney B. Canberra C. Cairo D. Melbourne
61. The monuments of Sukhothai is located in
 A. Germany B. Thailand C. France D. Brazil
62. Who designed the Rashtrapati Bhavan in Delhi ?
 A. Sir. Edwin Lutyens B. Lord Willington C. Lord Lytton D. Lord Curzon
63. One of the most beautiful oriented buildings is said to be 'an emperor's tears in marble'. Which is the building ?
 A. Taj Mahal B. Hawa Mahal C. Agra Fort D. Qutab Minar
64. Who became the most expensive player in the 2016 IPL ?
 A. Mohit Sharma B. Pawan Negi C. Shane Watson D. Yuvraj Singh
65. The venue of 2018 World Cup Football is
 A. Qatar B. Brazil C. Russia D. Canada
66. Who is the Father of Internet?
 A. Vint Cerf B. Charles Babbage C. Richard Stallman D. Seymour Cray
67. 1 Byte = bits
 A. 5 B. 6 C. 7 D. 8
68. The number of function keys on a computer keyboard is
- A. 9 B. 10 C. 11 D. 12
69. Which is the highest civilian award in India ?
 A. Padma Bhushan B. Padma Shri C. Bharat Ratna D. Padma Vibhushan

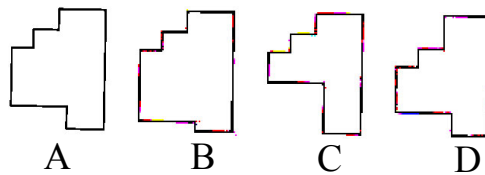
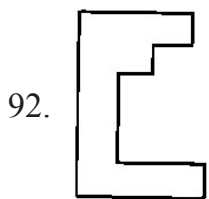
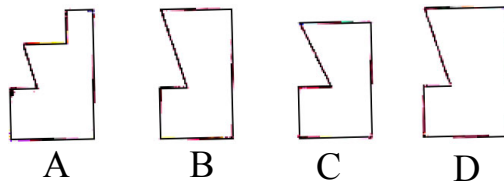
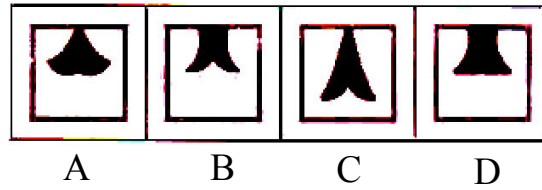

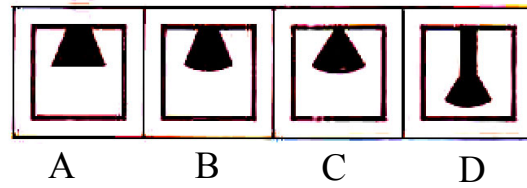

70. The largest populated city in India
 A. Mumbai B. Vatican City C. Delhi D. Calcutta
71. 'Monkey' is to 'Gibber' as 'Sparrow' is to
 A. Jingle B. Cackle C. Howl D. Chirp
72. In a row of 50 children, K is eleventh from the right end and there are 18 children between K and S .What is S's position from the left end of the row ?
 A. 21 B. 29 C. 39 D. 32
73. 3,4,6,10,18,34, ?
 A. 66 B. 48 C. 56 D. 50
74. Raheem goes toward east from a point P and then turns left. He walks some distance and then turns his right. Which direction is he facing now ?
 A. North B. East C. West D. South
75. If 1st January 2001 was Monday ,then what day of the week was it on 31st December 2001?
 A. Wednesday B. Friday C. Monday D. Saturday
76. What day of the week was on 2001, January 1st ?
 A. Wednesday B. Tuesday C. Monday D. Sunday
77. If + means \div , \div means -, - means \times , and \times means + , then $12+6\div 3-2\times 8=?$
 A. -2 B. 4 C. 2 D. 8

Direction (Q: Nos 78-87): In the following questions ,three of four alternatives are same in a certain way out of four,and so form a group .Find the odd word that does not belong to the group

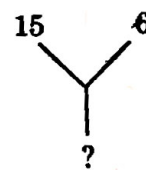
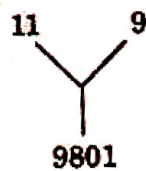
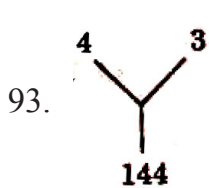
78. A. Blackmail B. Smuggling C. Snobbery D. Forgery
79. A. Ten B. Lira C. Dollar D. Ounce
80. A. Moon B. Football C. Earth D. Bangle
81. A. Raft B. Chariot C. Sledge D. Cart
82. A. Book B. Pages C. Index D. Chapters
83. A. Huge B. Tiny C. Heavy D. Small
84. A. Spring B. Heat C. Winder D. Autumn
85. A. Sweater B. Blouse C. Trouser D. Shirt
86. A. Sky B. Star C. Planet D. Comet
87. A. Rigveda B. Yajurveda C. Atharvaveda D. Ayurveda

Direction (Q: Nos 88-92): In the following questions choose the correct answer figure which will make a complete square on joining with the problem figure.





Direction(Q: Nos 93-100): In each of the following questions ,a set of figures carrying certain characters,is given. Assuming that the characters in each set follow a similar pattern, find the missing character in each case.

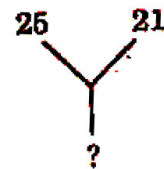
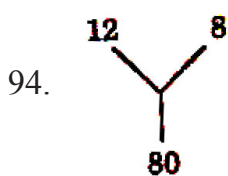


A. 1216

B. 2250

C. 8100

D. 11036

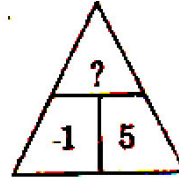
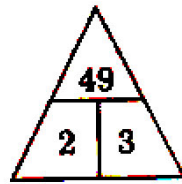
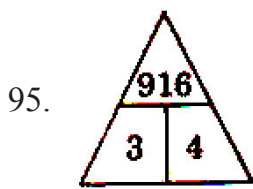


A. 184

B. 210

C. 241

D. 425

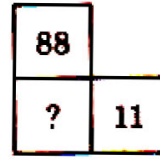
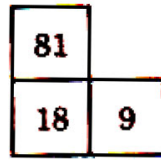
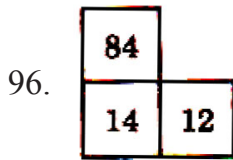


A. 125

B. 215

C. 251

D. 512

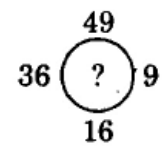
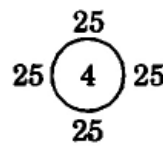
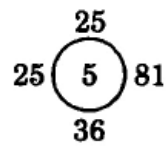
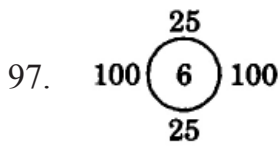


A. 16

B. 21

C. 61

D. 81

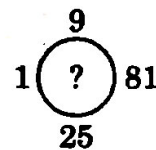
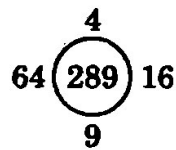
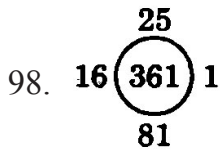


A. 2

B. 3

C. 4

D. 5

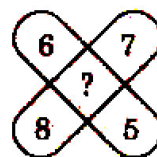
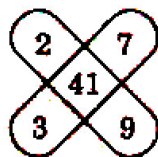
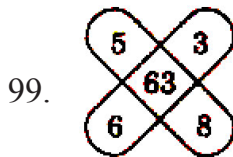


A. 260

B. 269

C. 324

D. 429


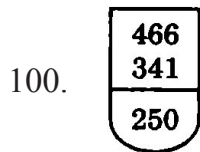


A. 26

B. 82

C. 83

D. 86



A. 232

B. 268

C. 298

D. 350

Space for rough works