

VTS EXAMINATION 2016-17 (FINAL)
QUESTION PAPER

Class : IV

4

Register No :

Score : 200
Time : 2 hrs

General Instructions

1. Candidates are supplied with an OMR Answer Sheet.
 2. Answer the questions in the OMR Sheet by shading the appropriate bubble.
 3. Shade the bubbles with black ball point pen.
 4. Each question carries four marks.
 5. Use the space provided in the last page for rough work.
-

Read the passage and answer the questions from 1 to 4.

Birds are creatures that have feathers, wings and a beak. They are warm-blooded creatures and are always ready to fly into action. In fact, birds are the most powerful fliers of all living beings. There are more than 2000 species of birds in our country. Among these, the most beautiful, attractive and brilliantly coloured one is the peacock.

This charming bird is a familiar sight all over the country. It belongs to the family of pheasants. The female is called a peahen. The male as a peacock. Collectively, both are called peafowl. The Indian peafowl lives mainly in the humid areas of our country.

1. There are more than species of birds in our country.
A. 4000 B. 2000
C. 3000 D. 5000
2. is the most beautiful, attractive and brilliantly coloured bird.
A. Penguin B. Parrot
C. Peacock D. Wood pecker
3. Peacock belongs to family.
A. Pheasants B. Peafowl
C. Peahen D. None of these

4. Find out the word which is the antonym of the word 'ugly'.
- A. Terrible B. Beautiful
C. Frightening D. Powerful
5. They to Church everyday.
- A. Goes B. Went
C. Go D. Going
6. She is a lady
- A. Charmed B. Charm
C. Charming D. Charmful
7. Veena had fever. But now she has recovered.
- A. Highly B. Fully
C. Fairly D. Hugely
8. The luggage is heavy to carry
- A. Enough B. Too
C. Very D. So
9. The players are very happy. They
- A. Must win the match B. Must have won the match
C. Must won the match D. Must have win the match
10. The meeting will be conducted 10. 00 am and 11. 30 am
- A. From B. At
C. Between D. In
11. How many 9's are there succeeded by 3 in the given sequence ?
8, 9, 6, 7, 3, 9, 3, 7, 8, 3, 9, 4, 5, 6, 3, 9, 6, 9.
- A. 1 B. 2
C. 3 D. 4

12. What part of an hour is five seconds ?

A. $\frac{1}{360}$ B. $\frac{1}{720}$

C. $\frac{1}{900}$ D. $\frac{1}{1800}$

13. Diameter of a circle is

- A. The longest chord of the circle B. Double of the radius
C. A line passing through the centre D. All of these

14. $2.016 + 1.8 = \dots\dots\dots$

- A. 2.034 B. 3.816
C. 2.196 D. 0.3816

15. If P denotes \div
Q denotes \times
R denotes $+$
and S denotes $-$

then, $8 Q 4 P 2 R 5 S 6 = \dots\dots\dots$

- A. 10 B. 5
C. 16 D. 15

16. The man who makes iron tool is called blacksmith, the man who makes jewels is called
 $\dots\dots\dots$

- A. Chemist B. Pharmacist
C. Carpenter D. Goldsmith

17. Birds have different types of feet. Which of the following bird's feet helps to swim in water ?

- A. Hen B. Sparrow
C. Duck D. Crow

18. October 2 is the birthday of Gandhiji; that day is celebrated as
- A. World Peace Day B. World Water Day
C. World Forest Day D. World Non-Violence Day
19. Adhi and Aju are friends. They always eat pizza and shawarma. It is not a good food habit, why?
- A. It is very tasty food B. It is harmful to health
C. It is healthy food D. None of the above.
20. Which is known as 'beast of burden' ?
- A. Giraffe B. Cow
C. Dog D. Donkey
21. Which Airport has become the world's first Airport to completely operate on solar power ?
- A. Indira Gandhi Airport B. Cochin Airport
C. Chennai Airport D. Karipur Airport
22. Which one of the following is the first digital state of India ?
- A. Kerala B. Karnataka
C. Andhra Pradesh D. Assam
23. When was the first general election conducted in Kerala?
- A. 1955 B. 1956
C. 1957 D. 1958
24. Who is the head of a state government ?
- A. Governor B. Chief Minister
C. Chief Secretary D. Director General of Police

25. A medical specialist who deals with bones
- A. Neurologist B. Cardiologist
C. Dentist D. Orthologist
26. The first Muslim Juma Masjid in Kerala
- A. Ponnani Juma Masjid B. Cheraman Juma Masjid
C. Mishkal Masjid D. None of these
27. How many Vedas are there in Hindu Religion ?
- A. 6 B. 5
C. 4 D. 7
28. 'Dilli Chalo' was a slogan put forward by
- A. Nehru B. Tilak
C. Subhash Chandra Bose D. Gandhiji
29. In which language was Kesari, a news paper started by Bal Gangadhar Tilak published ?
- A. Marathi B. Hindi
C. English D. Urdu
30. " Swaraj is my birth right and I shall have it ". Who said these words ?
- A. Kelappan B. Bal Gangadhar Tilak
C. Bhagat Singh D. Subash Chandra Bose
31. Which of the following is the capital of Jharkhand ?
- A. Kohima B. Ranchi
C. Gangtok D. Bhopal

32. 'Statue of Liberty' is situated in
- A. America B. Egypt
C. France D. Germany
33. Badarinath is situated on the bank of river
- A. Yamuna B. Alaknanda
C. Saraswati D. Ganga
34. Which country won the Sulthan Azlan Shah Cup 2016 ?
- A. India B. New Zealand
C. Pakistan D. Australia
35. C.V.Raman was awarded the Nobel Prize for Physics in 1930 for the discovery of
- A. Relativity theory B. Bulb
C. Raman effect D. None of these
36. Book:Chapter
- A. Pen:Pencil B. Computer:Calculator
C. Mobile:Landline D. House:Room
37. In a row of boys, Kareem is 6th from the start and 13th from the end .In another row of boys, Biju is 17th from the start and 8th from the end .How many boys are there in both rows together ?
- A. 42 B. 44
C. 25 D. 19
38. 1,1,2,3,5,8,13, ?
- A. 17 B. 21
C. 22 D. 31

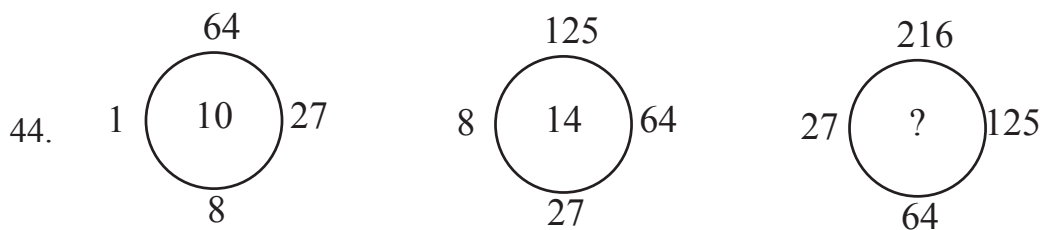
39. A man started walking west. He turned right ,then right again and finally turned left. Toward which direction is he walking now ?

- A. North B. South
C. West D. East

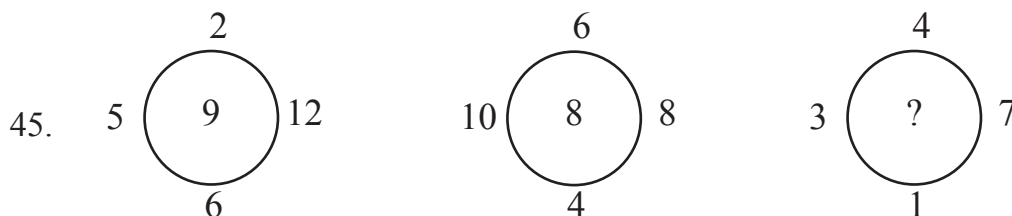
Direction (Q:Nos 40-43): In each of the following questions ,some groups of letters are given, all of which except one ,share a common similarity while one is different. Select the odd one.

40. A. ZYW B. SQN C. GEB D. MKH
41. A. DCBA B. ZYXW C. SRPQ D. HGFE
42. A. YWU B. NLJ C. KIF D. VTR
43. A. TWXZ B. ADEG C. EHIK D. LNOQ

Direction(Q: Nos 44,45): In each of the following questions ,a set of figures carrying certain characters, is given. Assuming that the characters in each set follow a similar pattern, find the missing character in each case.

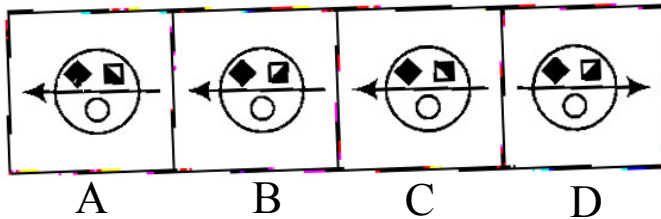
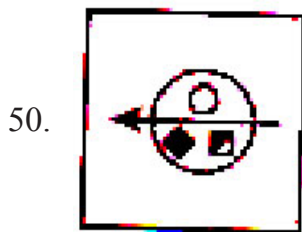
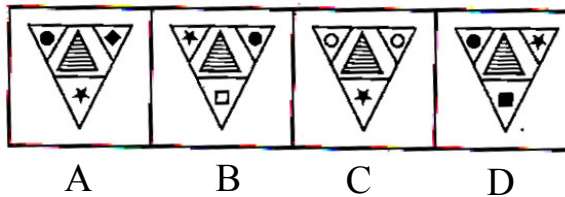
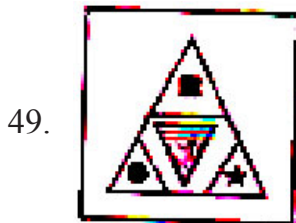
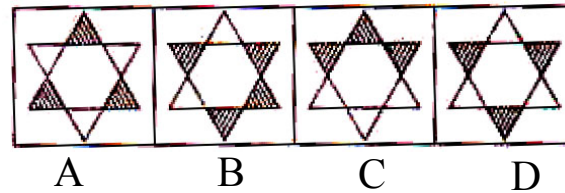
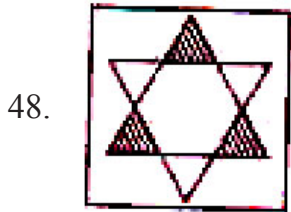
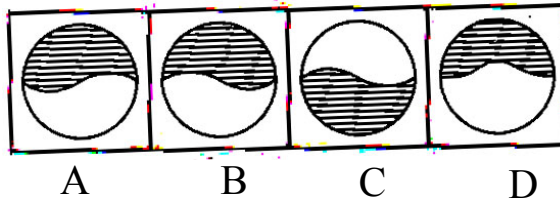
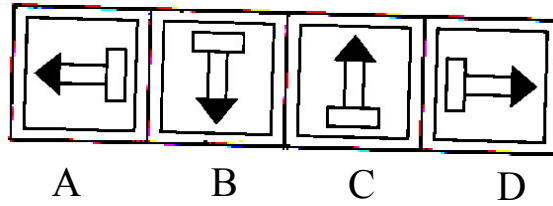
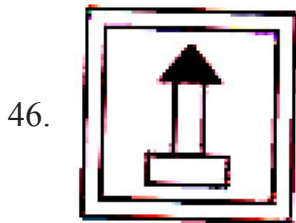


- A. 2 B. 9
C. 17 D. 18



- A. 5 B. 6
C. 7 D. 8

Direction (Q:Nos 46-50): Find the water image of the object given in the question figure denoted by (A) out of the figures given in the answer figures A, B, C and D



Space for rough works