

**VTS EXAMINATION 2016-17 (FINAL)**  
**QUESTION PAPER**

**Class : II**

**2**

**Register No :**

**Score : 200**  
**Time : 2 hrs**

---

**General Instructions**

1. Candidates are supplied with an OMR Answer Sheet.
2. Answer the questions in the OMR Sheet by shading the appropriate bubble.
3. Shade the bubbles with pencil.
4. Each question carries four marks.
5. Use the space provided in the last page for rough work.

---

**Read the passage and answer the questions from 1 to 4**

Tom Sawyer lived with his aunt Polly. His cousins Sophie and John also lived there. Tom was always busy in doing pranks. He liked to do adventurous things. One day he teased his classmate John. John didn't like it and complained to Aunt Polly.

Aunt Polly decided to teach Tom a lesson. One Sunday morning, Aunt Polly told Tom to white-wash the fence. Tom felt very sad as other boys were playing or swimming. He felt bad that he would have to paint the fence and he would not be able to enjoy the beautiful and sunny weather outside. He wanted to keep himself away from the work. But he had to finish the work as soon as possible. So he started to whitewash the fence.

1. What did Tom Sawyer like ?  
A. To read books  
B. To play with his freinds  
C. To do adventorous things  
D. To paint aunt's fence
2. Who is Tom Sawyer's classmate ?  
A. Sophie  
B. Polly  
C. Mike  
D. John
3. What did Aunt Polly decide ?  
A. To give apple to Tom Sawyer  
B. To teach Tom a lesson  
C. To tease him  
D. To do some pranks
4. Why did Aunt Polly punish Tom ?  
A. He teased John  
B. He delayed his work  
C. He disobeyed aunt Polly  
D. He is adventurous

**Fill in the blanks suitably using given options**

5. We visited ..... Italy  
A. The                      B. An  
C. A                         D. No article
6. Are you coming to the party .....Saturday ?  
A. On                        B. In  
C. At                         D. Of
7. Geetha loves music. .... wants to be a singer  
A. He                        B. She  
C. It                         D. They

**Find out the opposite of the underlined word**

8. John is sad because his dog is dead, but Prem is .....because he has got a new dog.  
A. Happy                    B. Worry  
C. Gloomy                  D. Unhappy
9. Find out the word with correct spelling  
A. Mankey                  B. Monkey  
C. Menkey                  D. Monkay
10. The synonym of the word 'fast'.  
A. Slow                      B. Quick  
C. Repeat                    D. End
11. What comes next ?  
15, 20, 25 .....
- A. 35                         B. 10  
C. 30                         D. 40
12. Find the next number in the pattern 1, 4, 9, 16, .....
- A. 25                         B. 20  
C. 30                         D. 40

13. The shape of a one rupee coin is .....

A. Square                      B. Rectangle

C. Circle                        D. Triangle

14. .... fifty paise make 5 rupees.

A. 20                              B. 10

C. 5                                 D. 50

15. Rasiya bought 3 packets of biscuits having a price of 15 rupees per packet and a packet of cake which costs 50 rupees. How much rupees she has to pay ?

A. 65                              B. 150

C. 95                               D. 45

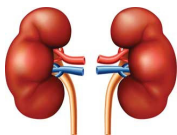
16. We have many internal organs. .... pumps blood to all parts of our body.



A. Brain



B. Heart



C. Kidney



D. Stomach

17. .... is the fastest means of communication.



A. Letter



B. Email



C. Radio



D. Telephone

18. Which of the following is a planet, where plants grow?



A. Sun



B. Moon



C. Earth



D. Star

19. Bus = Bus station

Ship = ?



A. Auto stand



B. Harbour



C. Airport



D. Railway station

20. Diwali is the festival of .....

A. Birthday

B. Light

C. Harvest

D. Republic Day

21. Name the Malayalam comedy animation series created by 'Toms'

A. Bobanum Moliyum

B. Mayavi

C. Mickey Mouse

D. Spiderman

22. Which of the following Temple witnessed the biggest fire work tragedy in Kerala ?

A. Sabarimala Temple

B. Padmanabhaswamy Temple

C. Puttingal Temple

D. Kodungallur Temple

23. Which of the following is a medicinal plant ?

A. Pine

B. Mint

C. Mahogany

D. Rosewood

24. Pick out the most bright planet  
 A. Mars  
 B. Jupiter  
 C. Uranus  
 D. Venus
25. The person who works with gold  
 A. Blacksmith  
 B. Goldsmith  
 C. Electrician  
 D. Plumber
26. Where will you go to get your birth certificate ?  
 A. Parliament  
 B. Panchayath  
 C. Police station  
 D. School
27. Which of the following is a pilgrim centre of Muslims ?  
 A. Guruvayoor temple  
 B. Mookambika temple  
 C. Cheraman Juma Masjid  
 D. St. Philomina Church

28. Identify the following picture



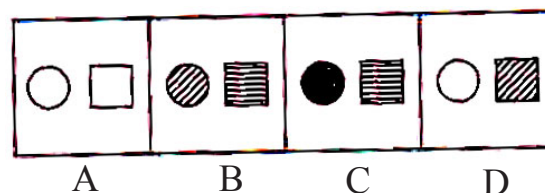
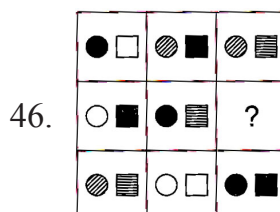
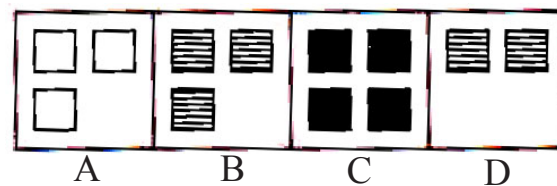
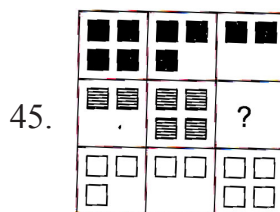
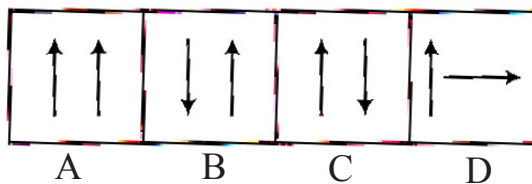
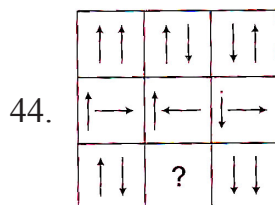
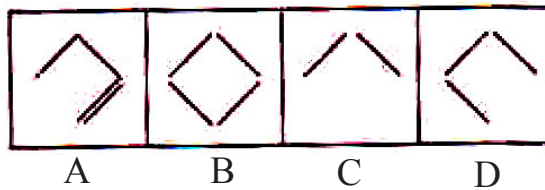
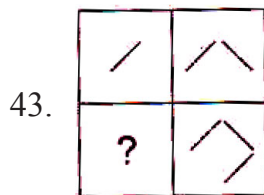
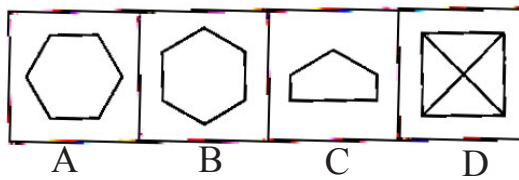
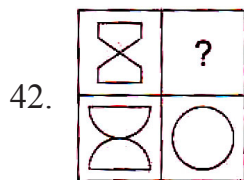

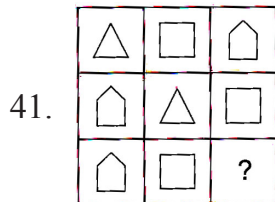

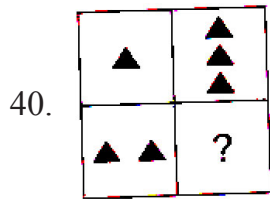
- A. Victoria Memorial  
 B. Lotus Temple  
 C. Opera House  
 D. Sun Temple
29. 'Do or Die' was the most powerful slogan of Indian freedom struggle. Who gave it ?  
 A. Mahatma Gandhi  
 B. J.C. Bose  
 C. Bal Gangadhar Tilak  
 D. Jawaharlal Nehru



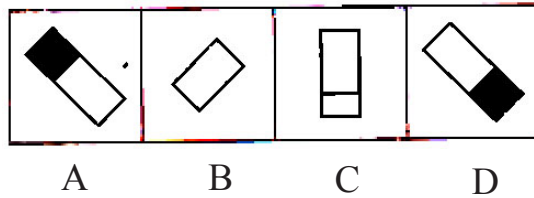
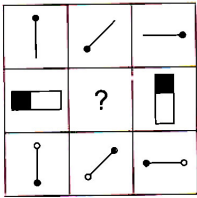
30. Identify the person  
 A. Kunwar Singh  
 B. Bhagat Singh  
 C. Sukhdev  
 D. Chandrasekhar Azad
31. The living organisms with six legs are called .....
- A. Mammals  
 B. Insects  
 C. Reptiles  
 D. Amphibians

32. It is shaped like a star. If you cut-off its arms, new arms will grow. It is called a fish though it isn't a fish. Name it
- A. Whale                                      B. Octopus  
C. Crocodile                                   D. Starfish
33. Amaravathi is the proposed capital city of ..... state
- A. Arunachal Pradesh                      B. Orissa  
C. Assam                                        D. Andhra Pradesh
34. Where can you see the Lotus Temple ?
- A. Agra    B. Chennai  
C. New Delhi                                   D. Kolkata
35. Which temple dedicated to the Sun-God is shaped like chariot ?
- A. Jagannath Temple                        B. Lotus Temple  
C. Sun-Temple                                D. None of these
36. Doctor:Teacher::Hospital: ?
- A. Nurse                                      B. School  
C. Bus    D. Principal
37. Hadi ranked 11th from the top and 17th from the bottom in a class .How many students are there in the class ?
- A. 27    B. 28  
C. 18    D. 29
38. 3, 5, 7, 9, 11, ?
- A. 10    B. 13  
C. 15    D. 14
39. Vandana is going northwards. She turns right then moves some distance. Which direction is Vandana now going ?
- A. East                                         B. West  
C. North                                        D. South

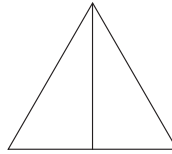
**Direction (40-47):** In each of the following questions, find out the answer figure which complete the problem figure matrix



47.




48. Count the number of triangles



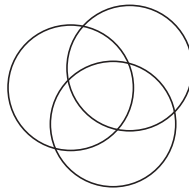
- A. 2
- B. 3
- C. 4
- D. 1

49. Count the number of rectangles



- A. 4
- B. 8
- C. 9
- D. 11

50. Count the number of circles



- A. 1
- B. 2
- C. 3
- D. 4

Space for rough works