

VTS EXAMINATION 2016-17 (FINAL)
QUESTION PAPER

Class : I

1

Register No :

Score : 200
Time : 2 hrs

General Instructions

1. Candidates are supplied with an OMR Answer Sheet.
2. Answer the questions in the OMR Sheet by shading the appropriate bubble.
3. Shade the bubbles with pencil.
4. Each question carries four marks.
5. Use the space provided in the last page for rough work.

Read the passage and answer the questions from 1 to 4

Carly has a large family. She lives with four people. Carly also has two pets.

Carly's mom is a doctor. Carly's mom works at the hospital. Carly's mom helps people who are sick.

Carly's dad works at home. Carly's dad works for the family. Carly's dad drives the kids to soccer practice.

Carly has two brothers. James is ten years old. Scott is fourteen years old.

Carly has two pets. Jinx is a small, black cat. Diego is a large brown dog. Carly loves her family!

1. How many people are there in Carly's family ?
A. Four B. Five
C. Six D. Three
2. Carly's mom works at the
A. Restaurant B. Mall
C. Hospital D. School
3. The oldest brother in Carly's family is
A. James B. Scott
C. Diego D. Jinx
4. The passage is mostly about Carly's
A. Family B. Pets
C. Soccer team D. School

Fill in the blanks suitably using given options

5. I have umbrella
- A. The B. A
C. An D. No article



6. There is a bridge the river.
- A. Under B. On
C. Behind D. Over


7. Neethu and Veena are friends. are dancing.
- A. Our B. We
C. They D. Her

8. Pick out the correctly spelt word
- A. Gramer B. Grammer
C. Grammar D. Gramar

Find out the opposite of the underlined word

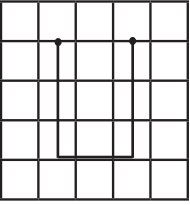
9. Anu likes hot milk. But Arun likes
- A. Warm B. Cold
C. Cool D. Wet
10. Find out the word which has the same meaning of 'feeling fear'
- A. Afraid B. Anxiety
C. Sad D. Happy


11. The number of mangoes is





- A. 4 B. 3
C. 2 D. 5

12. A girl walks 4 blocks down, 3 blocks right, 4 blocks up. Choose the correct path

A. 

B. 

C. 

D. 

13. The shape of a black board is

- A. Square B. Line
 C. Triangle D. Circle

14. The number of corners of a square is

- A. 3 B. 5
 C. 1 D. 4

15. Find the missing number

2	3
4	5

6	?
8	9

- A. 11 B. 1
 C. 7 D. 10

16. Meettu has a pet. It is a white puppy. She wants to make a for it.



- A. Stable B. Kennel

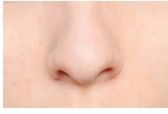


- C. Burrow D. Nest

17. My uncle's wife is my

- A. Aunt
- B. Grandmother
- C. Cousin
- D. Mother

18. Find the odd one.



- A. Nose
- B. Hand



- C. Leg
- D. Brain

19. Which of the following has only one seed ?



- A.
- B.



- C.
- D.

20. The shape of the earth is

- A. Round
- B. Triangle
- C. Rectangle
- D. Square

21. Name the Malayalam poet who died on 13th February 2016.



- A. Kumaranasan
- B. Ulloor
- C. Vallathol
- D. O.N.V. Kurup

22. Kumari Jayalalitha is the Chief Minister of which state ?



- A. Karnataka
- B. Tamil Nadu
- C. Maharashtra
- D. Andhra Pradesh

23. The fastest land animal is



- A. Lion
- B. Cheetah
- C. Elephant
- D. Cat

24. Which festival is known as the 'festival of colours' ?



- A. Holi
- B. Diwali
- C. Onam
- D. Dussehra

25. Who mends our shoes ?



- A. Barber
- B. Cobbler
- C. Tailor
- D. Mason

26. Who looks after a flock of sheep ?



- A. Shepherd
- B. Sweeper
- C. Cobbler
- D. Carpenter

27. Konark Temple is in



- A. Karnataka
- B. Punjab
- C. Odisha
- D. Maharashtra

28. Sabarimala is in which district ?



- A. Thrissur
- B. Kollam
- C. Alappuzha
- D. Pathanamthitta

29. Who is known as the 'Father of Indian Constitution' ?



- A. Dr. B.R. Ambedkar B. Dr. Rajendra Prasad
C. C. Rajagopalachari D. Sardar Vallabhbhai Patel

30. Who is this famous Indian ?



- A. Swami Vivekananda B. Subhash Chandra Bose
C. Bal Gangadhar Tilak D. Raja Ram Mohan Roy

31. Which part of our body has the largest bone ?

- A. Thigh B. Arm
C. Shank D. Foot

32. A baby lion is called

- A. Cub B. Puppy
C. Kid D. Calf

33. The pink city Jaipur is the capital of which state ?

- A. Rajasthan B. Bihar
C. Madhya Pradesh D. Orissa

34. Edakkal Cave is in



- A. Wayanad B. Kozhikode
C. Kasargode D. Kollam

35. Lalbagh garden is in



- A. Chennai B. Mysore
C. Bangalore D. Mumbai

36. Doctor:Hospital::Teacher: ?
A. Book B. Pencil
C. School D. Vacation
37. Mr. Razik is 3rd from the left in a row and 5th from the right .How many students are there in the row ?
A. 8 B. 7
C. 15 D. 9
38. 4, 8, 12, 16 , ?
A. 18 B. 20
C. 22 D. 20
39. 5, 10, 15, 20, ?
A. 25 B. 30
C. 21 D. 19
40. 1, 3, 5, 7, 9, ?
A. 11 B. 13
C. 10 D. 8
41. 10, 20, 30, 40, ?
A. 50 B. 55
C. 45 D. 41
42. Find out the odd word
A. Walking B. Running
C. Moving D. Reading
43. Find out the odd
A. Pen B. Book
C. Page D. Pencil
44. A, B, C, D, ?
A. F B. E
C. G D. Z

45. AB, CD, EF, ?

- A. GH
- B. FG
- C. HI
- D. GI

46. If $+ = -$, $- = +$, then $5 - 6 + 1 = ?$

- A. 0
- B. 10
- C. 1
- D. 12

47. Find out the odd

- A. 7
- B. 9
- C. 11
- D. 12


48. Count the number of squares







- A. 1
- B. 2
- C. 3
- D. 4

49. Mirror image of A is

- A. A
- B. ∇
- C. \blacktriangleleft
- D. \blacktriangleright

50.  , ?

 A  B  C  D

Space for rough works