

**VTS EXAMINATION 2016 -17**  
**PRELIMINARY QUESTION PAPER**

Class : IV

**4**

Register No :

Score : 200  
Time : 2 hrs

---

**General Instructions**

1. Candidates are supplied with an OMR Answer Sheet.
2. Answer the questions in the OMR Sheet by shading the appropriate bubble.
3. Shade the bubbles with black ball point pen.
4. Each question carries four marks.
5. Use the space provided in the last page for rough work.

---

**I. Read the following passage and answer the questions that follow.**

Seagulls live on the beach. They eat small fish, bread and seaweed. Seagulls run quickly on the sand and fly quickly in the sky. Seagulls will run or fly away if you try to catch them. There are many seagulls on the beach.

Crabs also live on the beach. They eat shrimp, ocean plants and small fish. Crabs crawl quickly on the sand and in the ocean. Crabs will crawl away if you try to catch them. There are many crabs on the beach, but it is not always easy to see them.

Starfish live on the beach too. They eat clams, oysters and small fish. Starfish move slowly on the sand and in the ocean. Starfish will not move away if you try to catch them. There are few starfish on the beach.

1. Seagulls, crabs and starfish all eat
  - A. Clams
  - B. Bread
  - C. Fish
  - D. Oyster
2. Based on the information in the passage, which sentence is false?
  - A. Starfish are hard to catch
  - B. Crabs eat shrimp and ocean plants
  - C. Seagulls move quickly on the sand and in the air
  - D. Many animals live at the beach
3. Which animal is common at the beach?
  - A. Crabs
  - B. Seagulls
  - C. Starfish
  - D. Oyster

4. Which animal does not move quickly?  
A. Starfish                      B. Seagulls  
C. Crabs                          D. Fish
5. You..... follow the traffic rules.  
A. May                              B. Might  
C. Must                             D. Can
6. Find out the correct sentence  
A. It may rain today                      B. Perhaps it may rain today  
C. It will may rain today                D. Perhaps it might rain today
7. I shall ..... to the party  
A. Come                              B. Coming  
C. Came                               D. Comes
8. Find out the odd one  
A. Cat                                B. Cow  
C. Cement                           D. Car
9. The number of syllables in the word 'forgotten' is .....
- A. 2                                      B. 1  
C. 4                                      D. 3
10. Write a rhyming word for the word 'sheet'  
A. Beast                               B. Feast  
C. Meet                                D. Least
11. The next number in the sequence 1 , 4 , 10 , 19 , 31 , ..... is  
A. 43                                    B. 45  
C. 46                                    D. 50
12. One hundred times of 100 is how many times of 500 ?  
A. 20                                    B. 5  
C. 50                                    D. 500

13. Aleena is making a 5 metres long garden wall. The length of one brick is 20 cm long. How many bricks will be needed to put in a line ?
- A. 20                      B. 25  
C. 5                         D. 100
14.  $1668 + 8756 - 2817 = \dots\dots\dots$
- A. 7637                    B. 6637  
C. 6747                    D. 7607
15. If  $A=3$  ,  $R=5$  ,  $I=7$  ,  $D=9$  ,  $E=4$  , then 'DEAR' = .....
- A. 21                      B. 20  
C. 18                      D. 19
16. Which animal does spend more time in water ?
- A. Crocodile              B. Crane  
C. Elephant               D. Yak
17. Find the odd one.
- A. River                    B. Mountain  
C. Lake                     D. Spring
18. Which part comes at first from the seed ?
- A. Stem                    B. Root  
C. Leaves                 D. Flower
19. My cousin lives in Karnataka. The language spoken in Karnataka is .....
- A. Bengali                 B. Tamil  
C. Marathi                 D. Kannada
20. Birds have different kinds of beaks. Which of the following bird's beak helps it to make holes in wood and tree trunks ?
- A. Eagle                    B. Woodpecker  
C. Parrot                   D. Pigeon
21. Who is the Governor of RBI ?
- A. C. D. Deshmukh        B. Urjit Patel  
C. Dr. Subbarao            D. Raghuram Rajan

22. Which city has been declared as the cleanest city in India ?  
A. Mysore                      B. Delhi  
C. Sikkim                      D. Bihar
23. Who was the first Chief Minister of Kerala to complete the tenure for five years ?  
A. A.K. Antony                      B. C. Achutha Menon  
C. K. Karunakaran                      D. E.K. Nayanar
24. Who was the first Chief Justice of Kerala High Court ?  
A. K. Sankaran                      B. M.S. Menon  
C. T.C. Raghuram                      D. K.T. Koshi
25. Who is the Chancellor of University ?  
A. Governor                      B. Lecturer  
C. Minister                      D. Teacher
26. Who was the founder of Sikh Religion ?  
A. Guru Nanak                      B. Guru Govind Singh  
C. Jesus Christ                      D. Guru Angath
27. Who is the author of Ramayana ?  
A. Kalidasa                      B. Vyasa  
C. Valmiki                      D. Bharatha Muni
28. Who was considered as the political guru of Mahatma Gandhi ?  
A. Nehru                      B. Lala Lajapat Rai  
C. Gopal Krishna Gokhale                      D. Bal Gangadhar Tilak
29. Who was the author of our National Song ?  
A. Abdul Kalam Azad                      B. Rabindranath Tagore  
C. Muhammed Iqbal                      D. Bankim Chandra Chatterjee

30. .... is known as the “Tiger of Mysore”.

A. Tipu Sultan            B. Pazhassi Raja

C. Jhansi Rani            D. None of these

31. Agartala is the capital of .....

A. Tripura            B. Meghalaya

C. Punjab            D. Nagaland

32. The Pyramid of Khufu is situated in .....

A. Germany            B. Egypt

C. India            D. Moscow

33. Ajanta and Ellora caves are found in .....

A. Ajmeer            B. Jaipur

C. Patna            D. Aurangabad

34. Identify the famous boxing player given in the picture



A. K.T. Jadav            B. Susheel Kumar

C. Vijender Singh            D. None of the above

35. Identify the person who discovered “Radium”



A. Jane goodall            B. Maria Mayer

C. Madame Curie            D. None of the above

36. Chair:Wood::

A. Book:Print            B. Mirror:Glass

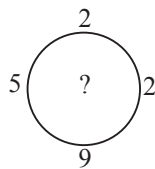
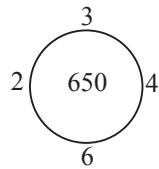
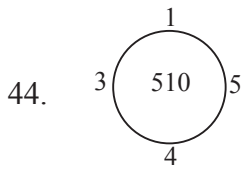
C. Plate:Food            D. Purse:Money

37. In a row of girls Shahina is 34th from the start and 3rd from the end. In another row of girls Sreeja is 11th from the start and 30th from the end. How many girls are there in both rows together ?
- A. 78                      B. 76  
C. 37                      D. 41
38. 2,2,4,6,10,16,26, ?
- A. 42                      B. 40  
C. 52                      D. 36
39. Mr. fasil started walking west. He turned right ,then right again and finally turned left. Towards wich direction is he walking now?
- A. North                      B. South  
C. West                      D. East

**Direction (Q:Nos 40-43 ):** In each of the following questions ,some groups of letters are given , all of which except one ,share a common similarity while one is different. Select the odd one

40. A. CAE                      B. KGM                      C. NLP                      D. YWA
41. A. NKMJ                      B. FCEB                      C. URTQ                      D. TQRP
42. A. BCDE                      B. JKLM                      C. STVU                      D. WXYZ
43. A. J30T                      B. D22R                      C. H26R                      D. A28Z

**Direction(Q: Nos 44-45):** In each of the following questions ,a set of figures carrying certain characters,is given. Assuming that the characters in each set follow a similar pattern, find the missing character in each case.

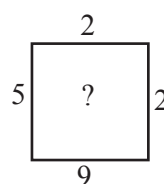
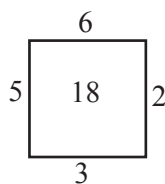
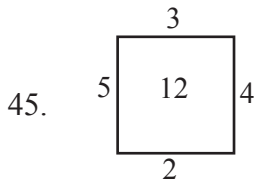


A. 610

B. 660

C. 670

D. 690



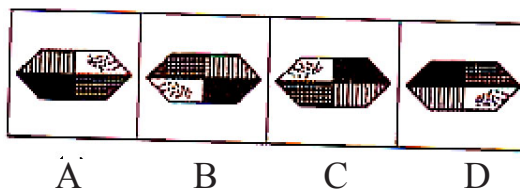
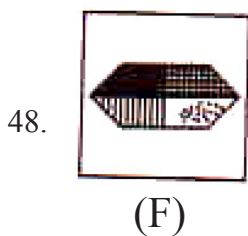
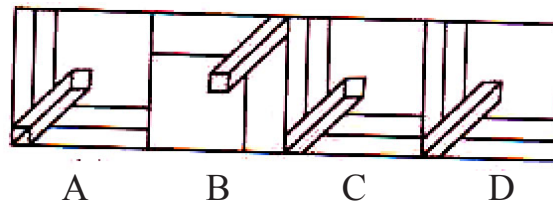
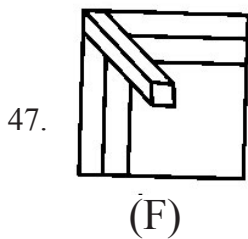
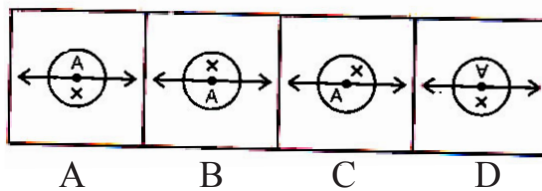
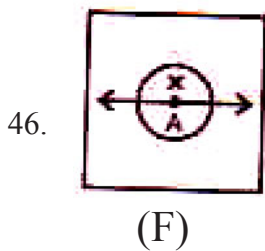
A. 15

B. 16

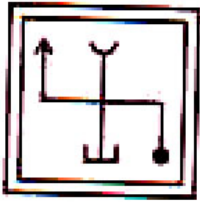
C. 17

D. 18

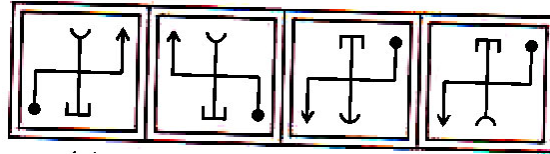
**Direction (Q:Nos 46-50): Find the water image of the object given in the question figure denoted by (F) out of the figures given in the answer figures A, B, C, D.**



49.



(F)



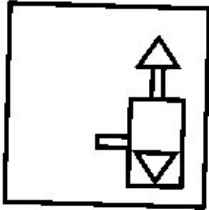
A

B


C

D

50.



(F)



A

B

C

D

Space for rough works