

MTS EXAMINATION 2015 - 16

Class : II

QUESTION PAPER

Register No :

Score : 200

Time : 2 hrs

General Instructions

1. Candidates are supplied with an OMR Answer Sheet.
2. Answer the questions in the OMR Sheet by shading the appropriate bubble.
3. Shade the bubbles with pencil.
4. Each question carries four marks.
5. Use the space provided in the last page for rough work.

Read the passage and answer the question from 1 to 4.

Sam was a greedy and a selfish man. He always desired to have lots and lots of wealth and never hesitated to cheat others to earn money. Also, he never wished to share anything with the others. He was so selfish that he would like to own everything for himself. The selfish man used to calculate each and every small aspect. He paid a very little amount of wages to his servants. Wherever he went, he calculated a lot to save money by deceiving others. He also told a lot of lies to protect his wealth. Simply, Sam was the antonym for the word; HONESTY.

1. What kind of man Sam was?
A. Honest B. Greedy and selfish C. Punctual D. Social worker
2. What did Sam desire to have?
A. A garden at his home B. Many children
C. Lots and lots of wealth D. None of these
3. Which of the following statements is correct?
A. He wished to share everything with others
B. He paid a huge amount of wages to his servants
C. He was not selfish
D. He paid a very little amount of wages to his servants
4. Find out the opposite of the word 'Honest'
A. Dishonest B. Protect C. Highest D. Forget
5. Raju _____ gone to market
A. were B. have C. the D. has
6. Choose the correct sentence from the following.
A. He were reading a book. B. He reading a book.
C. He is read a book. D. He was reading a book
7. The horse _____ in the stable
A. was B. are C. were D. on

8. Choose the word with correct spelling.

- A. Clever B. Celevr C. Clver D. Claver

9. The dog

- A. Bleats B. Lows C. Barks D. Crows

10. 'Someone who cuts hair' is known as _____

- A. Barber B. Farmer C. Wood cutter D. Carpenter

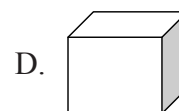

11. Which is equivalent to ₹ 40 ?

- A. ₹ 20 + ₹ 10 B. ₹ 50 - ₹ 10 C. ₹ 50 + ₹ 10 D. ₹ 30 + ₹ 20

12. Find the next: 1A, 3D, 5G, 7J,

- A. 8 K B. 9 K C. 10 M D. 9 M

13. Which shape does not belong to the same family ?



14. Pick out the odd one:

- A. 26 - 7 B. 13 + 6 C. 19 + 1 D. 19 + 0

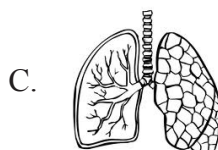
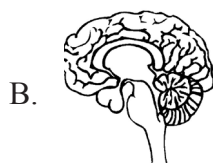
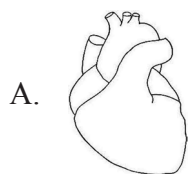
15. Today is Monday. The day after tomorrow will be

- A. Tuesday B. Wednesday C. Thursday D. Sunday

16. Hibiscus is a small plant, with strong stem. It cannot grow very tall. It is a

- A. Shrub B. Herb C. Climber D. Creeper

17. Which among the following helps us to think ?



18. Plants make food in

- A. Root B. Stem C. Flower D. Leaves

19. I am a bird but I cannot fly. I live in the coldest place on the earth. I am a

- A. Kiwi B. Albatross C. Penguin D. Ostrich

20. Onam is a harvest festival. Which season marks the celebration of harvest festivals ?

- A. Spring Season B. Winter Season C. Rainy Season D. Summer Season

21. Present governor of Kerala

- A. B.Rama Krishna Rao B. M.O.H.Farook C. V.V.Giri D. Palani sathyashivam

22. Which country won the world cup football in 2014
A. Uruguay B. Brazil C. Germany D. Spain
23. The old name of chennai was
A. Madras B. Tamilnadu C. Bombay D. Banglore
24. In which of the following states is the Lal bagh Garden situated
A. Karnataka B. Goa C. Tamilnadu D. Kerala
25. If you get a tooth ache whom don you approach
A. Paediatrician B. Dentist C. Dermatologist D. Cardiologist
26. A repairs my fathers car
A. Actor B. Painter C. Mechanic D. Driver
27. The workship place of sikhs is
A. Gurudwara B. Synagogue C. Church D. Temple
28. India's largest mosque Juma masjid situated in
A. Mumbai B. Kerala C. Delhi D. Agra
29. The birth place of sreenarayana guru is
A. Panmana B. Chempazhanty C. Swamithoppu D. Cheranallur
30. First chief minister of kerala
A. Narayanan B. R.Sankar C. E.M.S D. Ommen chandy
31. Human beings have travelled to the
A. Sun B. Moon C. Star D. None of these
32. The sun rises in the
A. East B. West C. North D. South
33. The capital of Bihar
A. Panaji B. Lucknow C. Bhopal D. Patna
34. Teak museum of kerala is located in
A. Nilambur B. Wayanad C. Nelliampathy D. Malampuzha
35. In which district of kerala is tha wellington Island situated
A. Wayanad B. Idukki C. Ernakulam D. Kozhikode

Space for rough works

